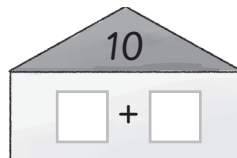
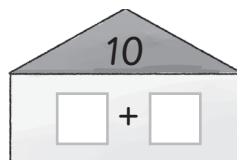
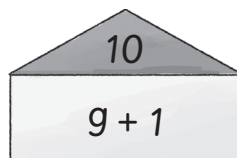
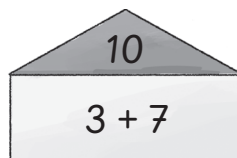


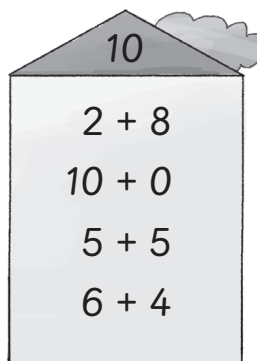

1 Schreibe.




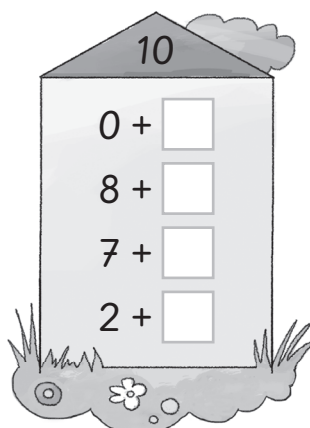

2 Male.



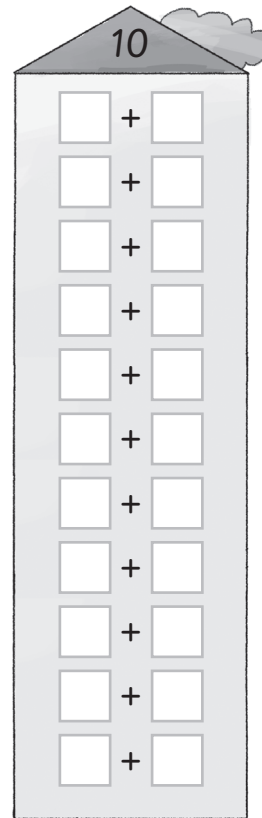

3 Male.




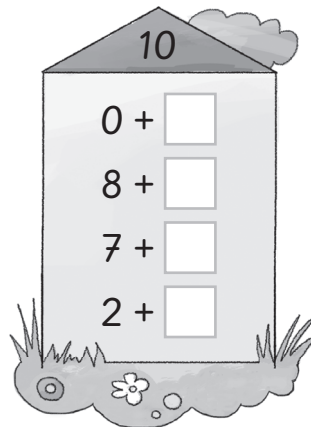

4 Ergänze.



1 Male und finde Zerlegungen.



2 Ergänze.



3 Ergänze.

$10 = 4 + \square$

$10 = 3 + \square$

$10 = \square + 5$

$10 = \square + 10$

$10 = 1 + \square$

$10 = 9 + \square$

$10 = \square + 0$

$10 = \square + 3$

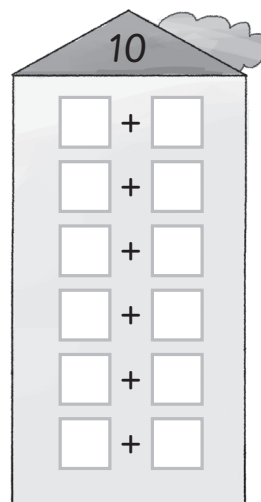
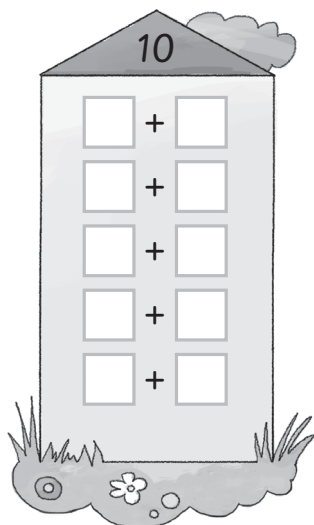
$10 = 7 + \square$

$10 = 2 + \square$

$10 = \square + 4$

$10 = \square + 9$

1 Finde Zerlegungen.



2 Ergänze.

$10 = 4 + \square$

$10 = 3 + \square$

$10 = \square + 5$

$10 = \square + 10$

$10 = 1 + \square$

$10 = 9 + \square$

$10 = \square + 0$

$10 = \square + 3$

$10 = 7 + \square$

$10 = 2 + \square$

$10 = \square + 4$

$10 = \square + 9$

3 Male und schreibe.



$\square + \square + \square$



$\square + \square + \square$



$\square + \square + \square$



$\square + \square + \square$

4 Ergänze.

