

10

$6 + 2 + \square$

$5 + 3 + \square$

$5 + \square$

$6 + 1 + \square$

$5 + 4 + \square$

$\square + 2$

$6 + \square$

$6 + 3 + \square$

$5 + 2 + \square$

$\square + 1$

$7 + \square$

$\square + 6$

$5 + 1 + \square$

$10 + \square$

$4 + 4 + \square$

$3 + 3 + \square$

$2 + 2 + \square$

$1 + 1 + \square$

$0 + 0 + \square$

$3 + 3 + 3 + \square$

$2 + 2 + 2 + \square$

$4 + 3 + 2 + \square$

$2 + 2 + 2 + 2 + \square$



1

$10 + 2 = \square$

$9 + 2 = \square$

$10 + 5 = \square$

$9 + 5 = \square$

$10 + 8 = \square$

$9 + 8 = \square$

$10 + 6 = \square$

$9 + 6 = \square$

2

$12 - 2 = \square$

$12 - 3 = \square$

$14 - 4 = \square$

$14 - 5 = \square$

$19 - 9 = \square$

$19 - 10 = \square$

$17 - 7 = \square$

$17 - 8 = \square$

3

$13 - \square = 10$

$13 - \square = 9$

$11 - \square = 10$

$11 - \square = 9$

$18 - \square = 10$

$18 - \square = 9$

$16 - \square = 10$

$16 - \square = 9$

4

$10 + 8 + \square$



$10 + 7 + \square$

$5 + 5 + \square$

$6 + 4 + 8 + \square$

$\square + \square + \square$

$10 + 10 + \square$

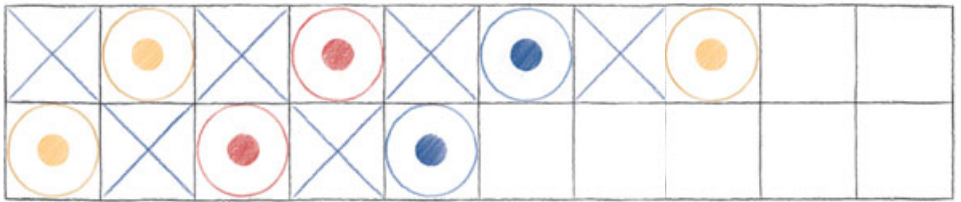
$\square + \square + \square$



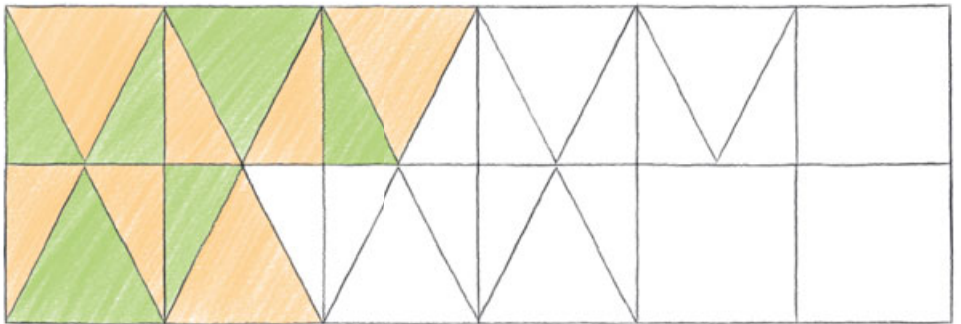
$\square + \square + \square$




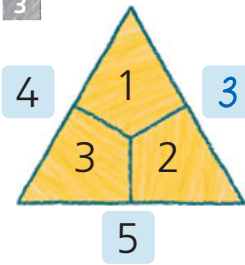
1



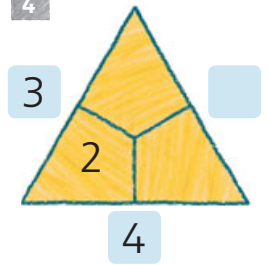
2



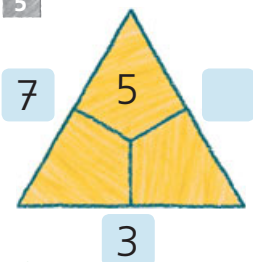
3



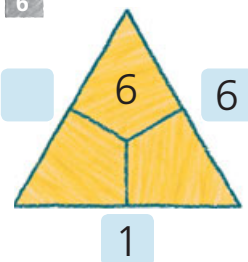
4



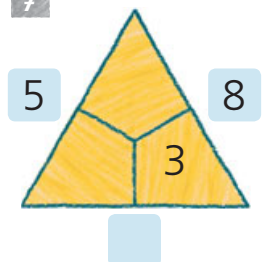
5



6



7





1

-	4	6
6		
16		
9		
19		

2

+	2	5
3		
13		
	7	
		20

3

-	5	
7		0
17		
10		
20		

4

$14 - 7 = \square$

$14 - 8 = \square$

$12 - 6 = \square$

$12 - 5 = \square$

5

$8 + 8 = \square$

$7 + 8 = \square$

$9 + 9 = \square$

$9 + 8 = \square$

6

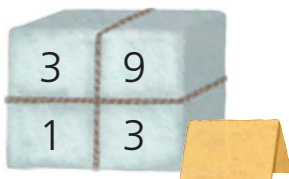
$16 - 8 = \square$

$15 - 8 = \square$


$16 - 8 = \square$

$16 - 7 = \square$


7



8



9



10

$7 + 9 = \square$

$4 + 9 = \square$

11

$12 - 7 = \square$

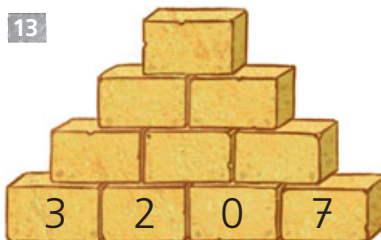
$13 - 9 = \square$

12



$2 + 16 = \square$

$3 + 14 = \square$

13



14





0	5	7	9	10	11	12	13	15	18	19	20
A	C	D	E	F	G	H	I	N	R	U	Z

- | | | | | | |
|-------------|----------------------|----------------------|-------------|----------------------|----------------------|
| $0 + 0 =$ | <input type="text"/> | <input type="text"/> | $2 + 11 =$ | <input type="text"/> | <input type="text"/> |
| $20 - 5 =$ | <input type="text"/> | <input type="text"/> | $15 - 10 =$ | <input type="text"/> | <input type="text"/> |
| $7 + 13 =$ | <input type="text"/> | <input type="text"/> | $19 - 7 =$ | <input type="text"/> | <input type="text"/> |
| $19 - 6 =$ | <input type="text"/> | <input type="text"/> | $18 - 8 =$ | <input type="text"/> | <input type="text"/> |
| $0 + 9 =$ | <input type="text"/> | <input type="text"/> | $9 + 9 =$ | <input type="text"/> | <input type="text"/> |
| $6 + 5 =$ | <input type="text"/> | <input type="text"/> | $15 - 6 =$ | <input type="text"/> | <input type="text"/> |
| $13 - 4 =$ | <input type="text"/> | <input type="text"/> | $2 + 17 =$ | <input type="text"/> | <input type="text"/> |
| $6 + 6 =$ | <input type="text"/> | <input type="text"/> | $16 - 9 =$ | <input type="text"/> | <input type="text"/> |
| $15 - 15 =$ | <input type="text"/> | <input type="text"/> | $1 + 8 =$ | <input type="text"/> | <input type="text"/> |

Kennst du das Lied?

MEINER

B ...